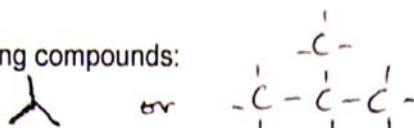


Nomenclature – Hydrocarbons and Haloalkanes (alkyl halides)

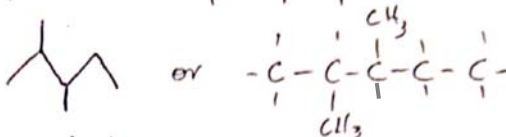
1. Alkanes

a) Draw the structures for the following compounds:

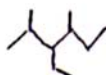
(i) 2-methylpropane



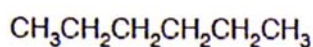
(ii) 2,3-dimethylpentane



(iii) 3-ethyl-2,4-dimethylhexane

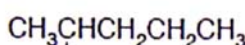


b) Name the following compounds, all of which have the molecular formula C_6H_{14} :

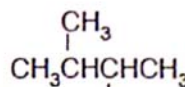


Hexane

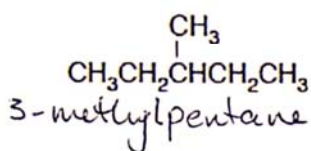
A



2-methylpentane

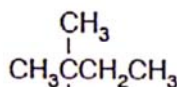


2,3-dimethylbutane



3-methylpentane

D



2,2-dimethylbutane

E

2. Cycloalkanes

a) Draw the structures for the following compounds:

(i) cyclobutane



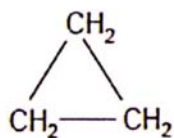
(ii) cyclopentane



(iii) 1,3-dimethylcyclohexane



b) Name these compounds:



cyclopropane



methylcyclopentane

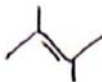
3. Alkenes and Alkynes

a) Draw the structures for the following compounds:

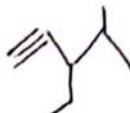
(i) but-2-ene



(ii) 2,3-dimethylbut-2-ene



(iii) 3-ethyl-4-methylpent-1-yne



b) What is incorrect with the name 2-methylbut-2-yne?

This name indicates a C has 5 bonds (not possible, therefore not correctly named.)

c) Name these compounds:

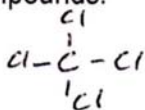
(i) $\begin{array}{c} \text{CH}_3\text{C}=\text{CH}_2 \\ | \\ \text{CH}_3 \end{array}$ 2-methylpropene

(ii) $\begin{array}{c} \text{CH}_3 \\ | \\ \text{CH}_3\text{CHCH}=\text{CCH}_3 \\ | \\ \text{CH}_3 \end{array}$ 2,4-dimethyl-2-pentene

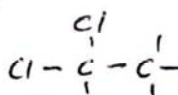
4. Compounds containing halogens

a) Draw the structures for the following compounds:

(i) tetrachloromethane



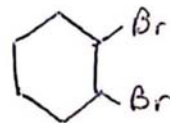
(ii) 1,1-dichloroethene



(iii) 1,2-dibromo-2-methylbutane



(iv) 1,2-dibromocyclohexane



b) Name these compounds:

(i) $\text{CH}_3\text{CH}_2\text{CH}_2\text{I}$ 1-iodopropane

(ii) $\begin{array}{c} \text{Br} \\ | \\ \text{CH}_3\text{CHCHCH}_3 \\ | \\ \text{Br} \end{array}$ 2,3-dibromobutane

(iii) $\begin{array}{c} \text{CH}_3\text{CH}_2\text{CH}=\text{CCH}_2\text{F} \\ | \\ \text{CH}_3 \end{array}$ 1-fluoro-2-methyl-2-pentene